



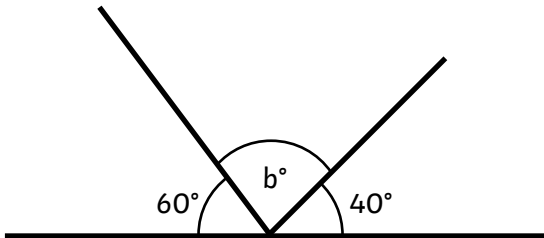
Missing Angles on a Straight Line

I can find unknown angles on a straight line.



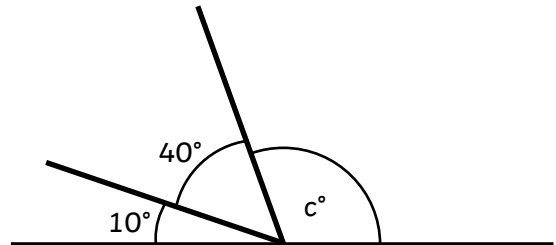
Calculate the missing angles:

1.



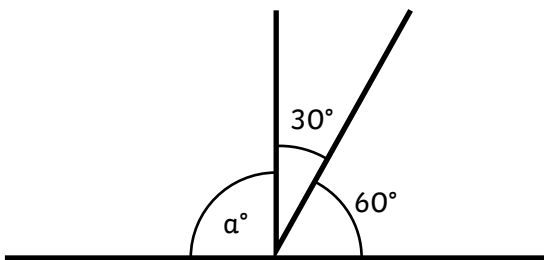
$$b = \text{-----}^\circ$$

2.



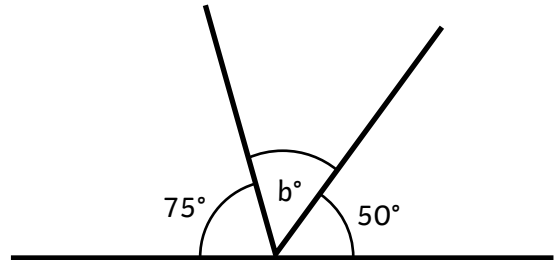
$$c = \text{-----}^\circ$$

3.



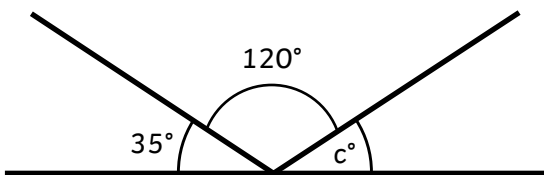
$$a = \text{-----}^\circ$$

4.



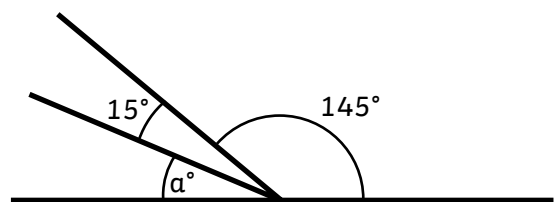
$$b = \text{-----}^\circ$$

5.



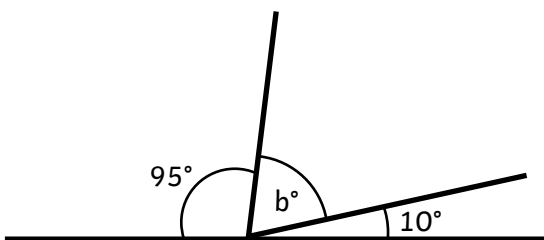
$$c = \text{-----}^\circ$$

6.



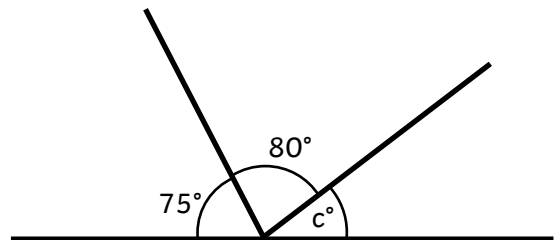
$$a = \text{-----}^\circ$$

7.



$$b = \text{-----}^\circ$$

8.



$$c = \text{-----}^\circ$$



Missing Angles on a Straight Line

I can find unknown angles on a straight line.



Calculate the missing angles:

<p>1.</p> <p>$b = \text{-----}^\circ$</p>	<p>2.</p> <p>$c = \text{-----}^\circ$</p>
<p>3.</p> <p>$a = \text{-----}^\circ$</p>	<p>4.</p> <p>$b = \text{-----}^\circ$</p>
<p>5.</p> <p>$b = \text{-----}^\circ$</p>	<p>6.</p> <p>$a = \text{-----}^\circ$</p>
<p>7.</p> <p>$c = \text{-----}^\circ$</p>	<p>8.</p> <p>$d = \text{-----}^\circ$</p>



Missing Angles on a Straight Line

I can find unknown angles on a straight line.



Calculate the missing angles:

<p>1.</p> <p>$b = \text{-----}^\circ$</p>	<p>2.</p> <p>$c = \text{-----}^\circ$</p>
<p>3.</p> <p>$a = \text{-----}^\circ$</p>	<p>4.</p> <p>$d = \text{-----}^\circ$</p>
<p>5.</p> <p>$e = \text{-----}^\circ$</p>	<p>6.</p> <p>$b = \text{-----}^\circ$</p>
<p>7.</p> <p>$c = \text{-----}^\circ$</p>	<p>8.</p> <p>$e = \text{-----}^\circ$</p>

Missing Angles on a Straight Line **Answers**

★	Question	Answer	Question	Answer
	1.	$b = 80^\circ$	2.	$c = 130^\circ$
	3.	$a = 90^\circ$	4.	$b = 55^\circ$
	5.	$c = 25^\circ$	6.	$a = 20^\circ$
	7.	$b = 75^\circ$	8.	$c = 25^\circ$

★★	Question	Answer	Question	Answer
	1.	$b = 64^\circ$	2.	$c = 61^\circ$
	3.	$a = 36^\circ$	4.	$b = 40^\circ$
	5.	$b = 36^\circ$	6.	$a = 44^\circ$
	7.	$c = 31^\circ$	8.	$d = 73^\circ$

★★★	Question	Answer	Question	Answer
	1.	$b = 24^\circ$	2.	$c = 10^\circ$
	3.	$a = 55^\circ$	4.	$d = 14^\circ$
	5.	$e = 73^\circ$	6.	$b = 39^\circ$
	7.	$c = 27^\circ$	8.	$e = 42^\circ$