



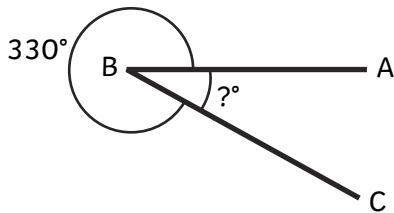
Missing Angles at a Point

I can find unknown angles around a point.



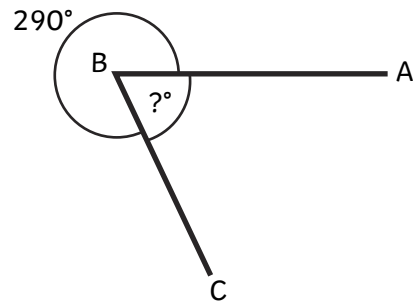
Calculate the missing angles:

1.



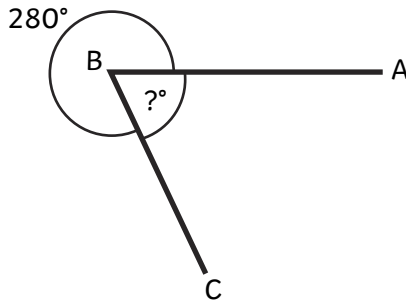
$$\angle ABC = \text{-----}^\circ$$

2.



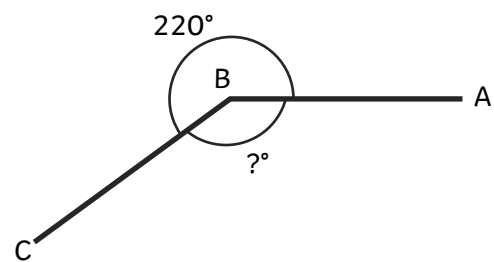
$$\angle ABC = \text{-----}^\circ$$

3.



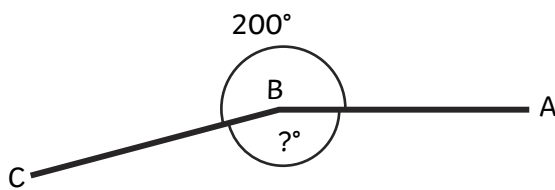
$$\angle ABC = \text{-----}^\circ$$

4.



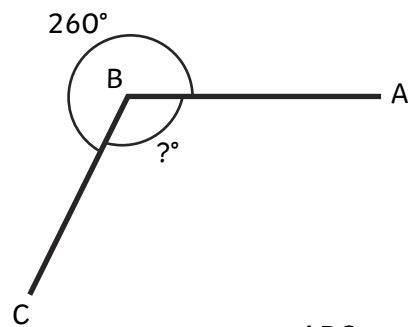
$$\angle ABC = \text{-----}^\circ$$

5.



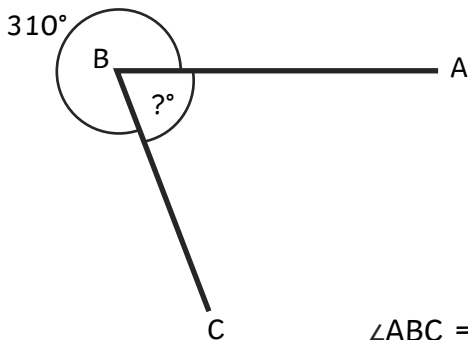
$$\angle ABC = \text{-----}^\circ$$

6.



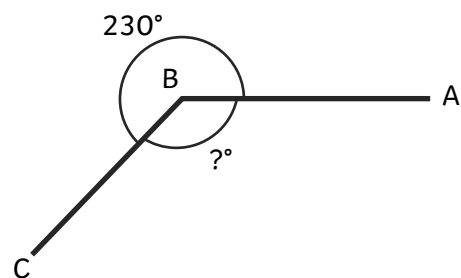
$$\angle ABC = \text{-----}^\circ$$

7.



$$\angle ABC = \text{-----}^\circ$$

8.



$$\angle ABC = \text{-----}^\circ$$



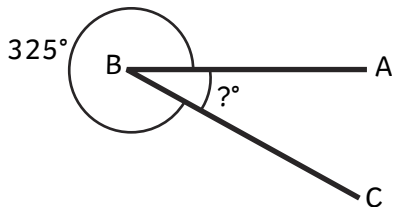
Missing Angles at a Point

I can find unknown angles around a point.



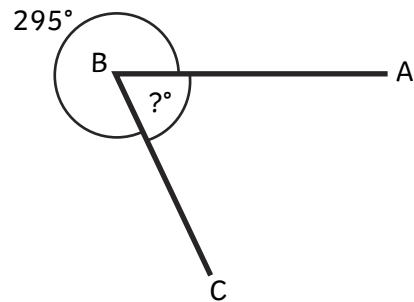
Calculate the missing angles:

1.



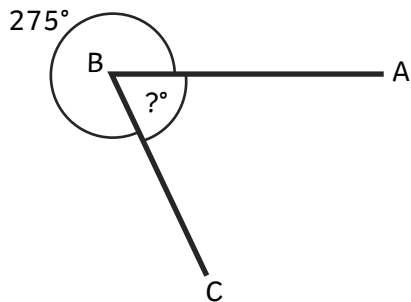
$$\angle ABC = \text{-----}^\circ$$

2.



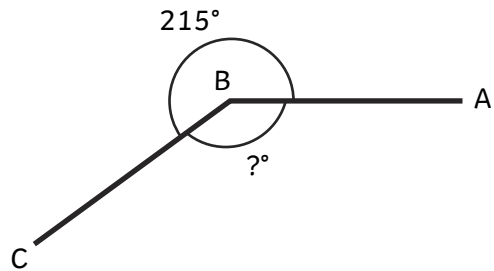
$$\angle ABC = \text{-----}^\circ$$

3.



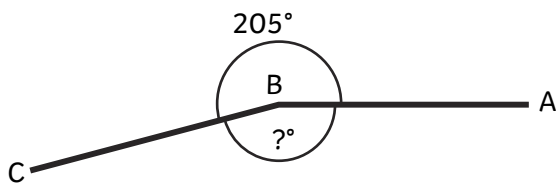
$$\angle ABC = \text{-----}^\circ$$

4.



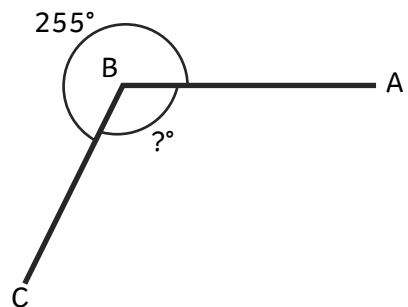
$$\angle ABC = \text{-----}^\circ$$

5.



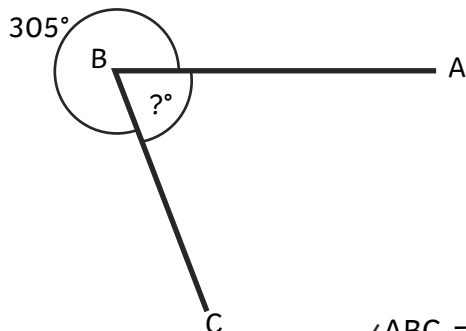
$$\angle ABC = \text{-----}^\circ$$

6.



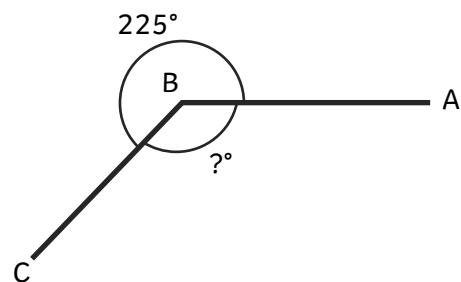
$$\angle ABC = \text{-----}^\circ$$

7.



$$\angle ABC = \text{-----}^\circ$$

8.



$$\angle ABC = \text{-----}^\circ$$



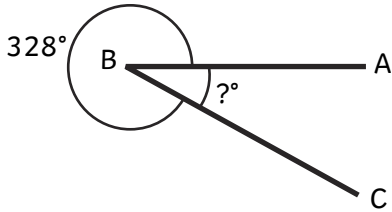
Missing Angles at a Point

I can find unknown angles around a point.



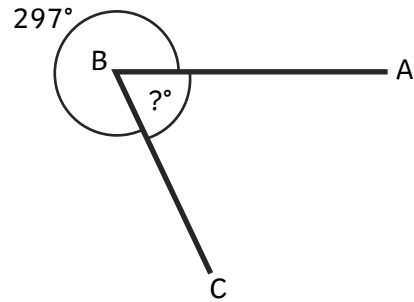
Calculate the missing angles:

1.



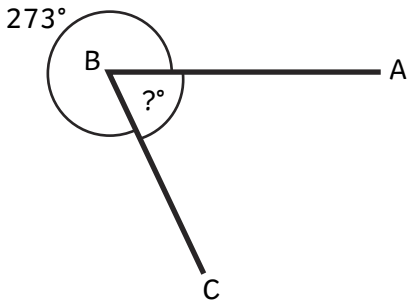
$$\angle ABC = \text{-----}^\circ$$

2.



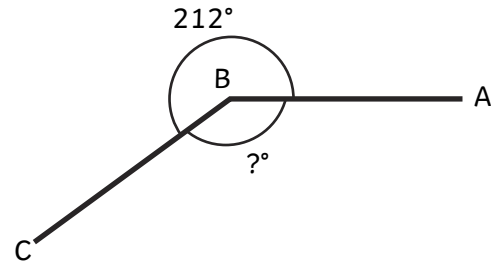
$$\angle ABC = \text{-----}^\circ$$

3.



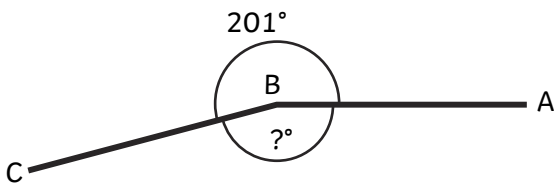
$$\angle ABC = \text{-----}^\circ$$

4.



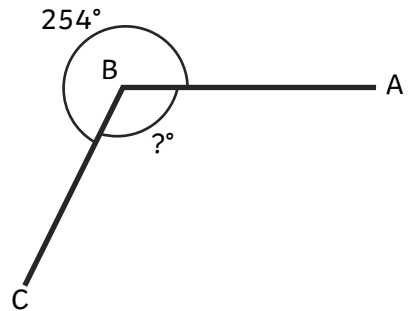
$$\angle ABC = \text{-----}^\circ$$

5.



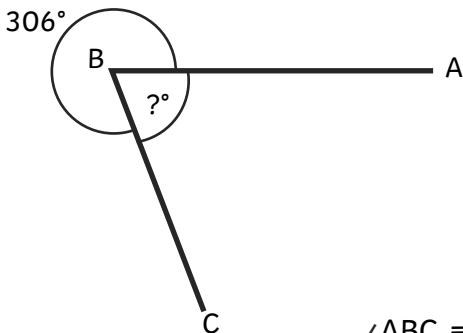
$$\angle ABC = \text{-----}^\circ$$

6.



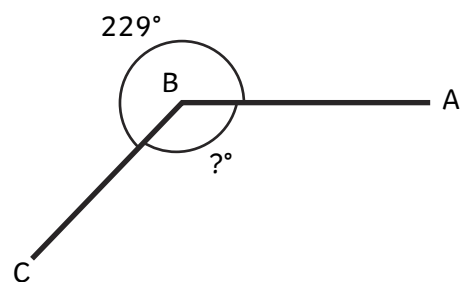
$$\angle ABC = \text{-----}^\circ$$

7.



$$\angle ABC = \text{-----}^\circ$$

8.



$$\angle ABC = \text{-----}^\circ$$

Missing Angles at a Point **Answers**

★	Question	Answer	Question	Answer
	1.	$\angle ABC = 30^\circ$	2.	$\angle ABC = 70^\circ$
	3.	$\angle ABC = 80^\circ$	4.	$\angle ABC = 140^\circ$
	5.	$\angle ABC = 160^\circ$	6.	$\angle ABC = 100^\circ$
	7.	$\angle ABC = 50^\circ$	8.	$\angle ABC = 130^\circ$

★ ★	Question	Answer	Question	Answer
	1.	$\angle ABC = 35^\circ$	2.	$\angle ABC = 65^\circ$
	3.	$\angle ABC = 85^\circ$	4.	$\angle ABC = 145^\circ$
	5.	$\angle ABC = 155^\circ$	6.	$\angle ABC = 105^\circ$
	7.	$\angle ABC = 55^\circ$	8.	$\angle ABC = 135^\circ$

★ ★ ★	Question	Answer	Question	Answer
	1.	$\angle ABC = 32^\circ$	2.	$\angle ABC = 63^\circ$
	3.	$\angle ABC = 87^\circ$	4.	$\angle ABC = 148^\circ$
	5.	$\angle ABC = 159^\circ$	6.	$\angle ABC = 106^\circ$
	7.	$\angle ABC = 54^\circ$	8.	$\angle ABC = 131^\circ$