



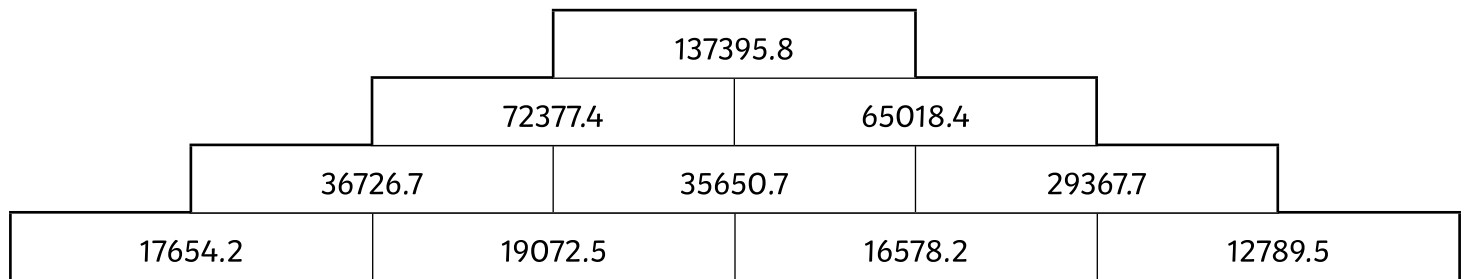
Pyramid Puzzles

I can add and subtract numbers using a formal written method.




Sort the numbers below into the correct positions on the blank pyramid. The first question has been completed for you. Hint! Think about where the largest number would go.

12789.5	29367.7	65018.4	35650.7	72377.4
36726.7	17654.2	19072.5	137395.8	16578.2




1)

43231.1	94628.4	51397.3	29155.1	20988.9
22242.2	9876.5	12365.7	16789.4	11112.4



2)

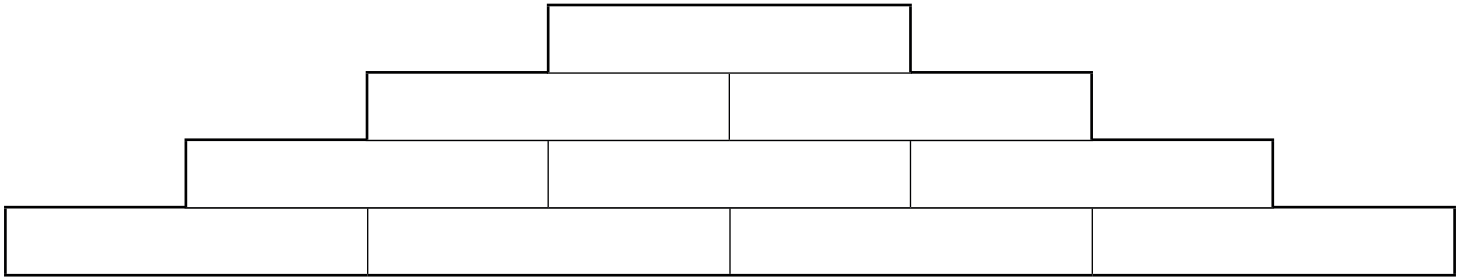
32458.3	14567.9	117864.4	56270.5	27134.9
17890.4	29135.6	61593.9	14567.7	12567.2



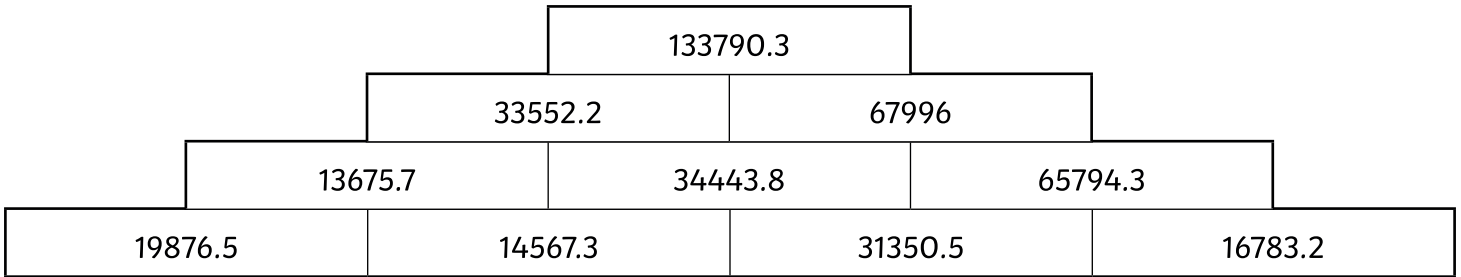


3)

26909.6	14563.7	19876.5	123531.9	62182.1
12345.9	34440.2	7865.4	61349.8	27741.9



4)





Pyramid Puzzles Answers

Question	Answer
Sort the numbers into the correct positions on the blank pyramid.	
1	<p>137395.8 72377.4 65018.4 36726.7 35650.7 29367.7 17654.2 19072.5 16578.2 12789.5</p>
2	<p>94628.4 43231.1 51397.3 20988.9 22242.2 29155.1 1112.4 9876.5 12365.7 16789.4</p>
3	<p>117864.4 56270.5 61593.9 27134.9 29135.6 32458.3 12567.2 14567.7 14567.9 17890.4</p>
4	<p>123531.9 61349.8 62182.1 26909.6 34440.2 27741.9 12345.9 14563.7 19876.5 7865.4</p>