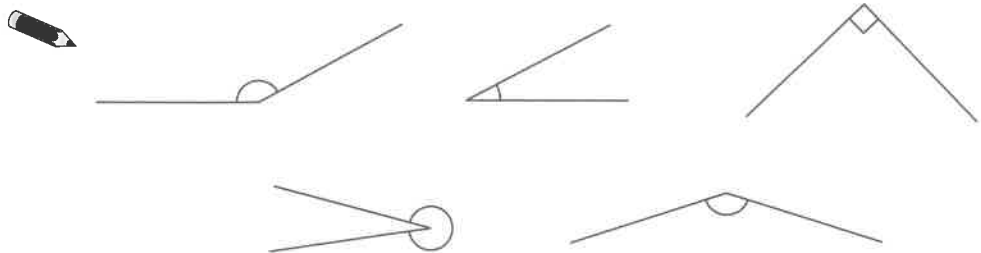


3. Look at the angles below.


Circle any **obtuse** angles.



1 mark

7. A shop sells pet food.

Corey buys  $\frac{1}{2}$  kg of rabbit food and 3 tins of dog food.



How much does he spend in total?

Show your working. You may get a mark.



£

2 marks

END OF TEST

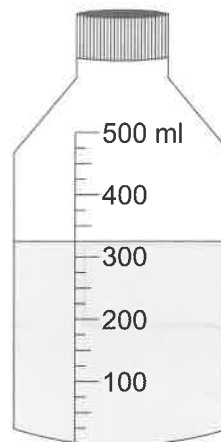
/ 10



# Set A: Test 4

There are **7 questions** in this test. Give yourself **10 minutes** to answer them all.

1. Corey bought a 500 ml bottle of water. Here is the bottle after Corey had drunk some water.



How much water did he drink?



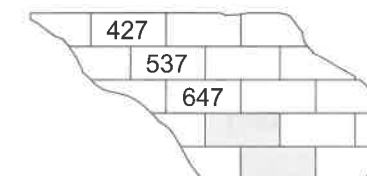
ml

1 mark

2. Here is part of a number wall. The shaded numbers are part of a sequence.

8	119	120	121	122	
228	229	230	231	232	
7	338	339	340	341	342
47	448	449	450	451	452
57	558	559	560	561	
667	668	669	670	671	

Here is another part of the wall. The bricks are numbered using the same sequence.



What numbers belong on the two shaded bricks above?



and

2 marks